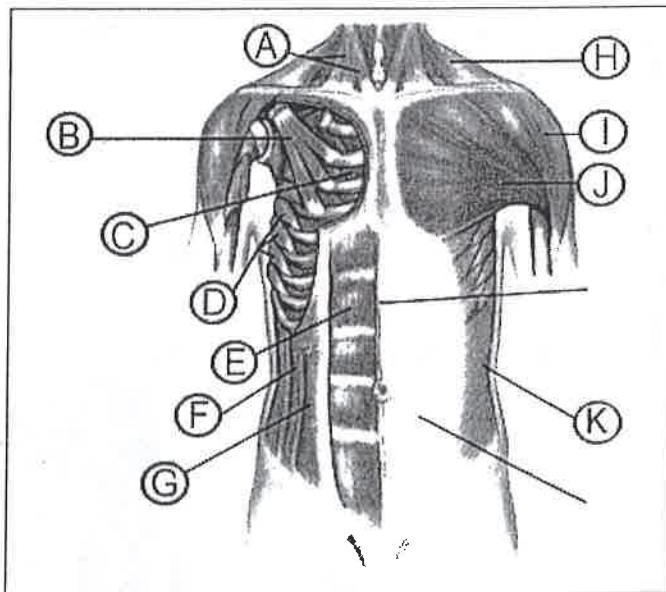
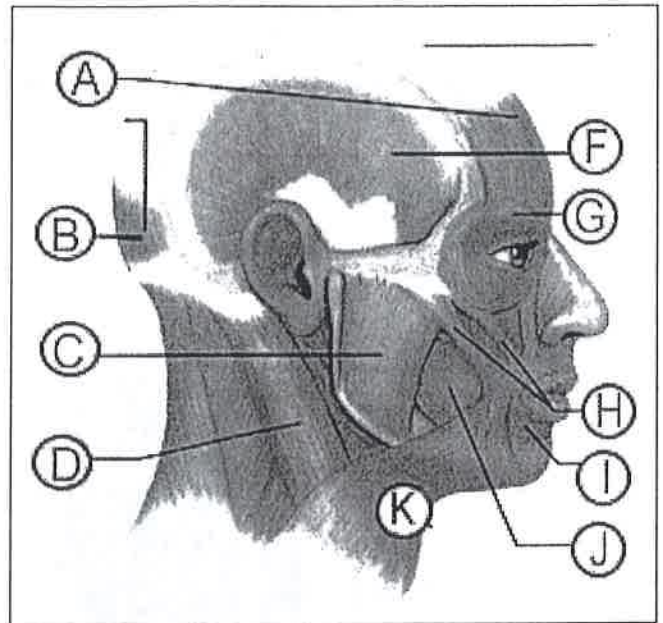


Muscle Identification Activity

Name: _____ Period: _____ Date: _____

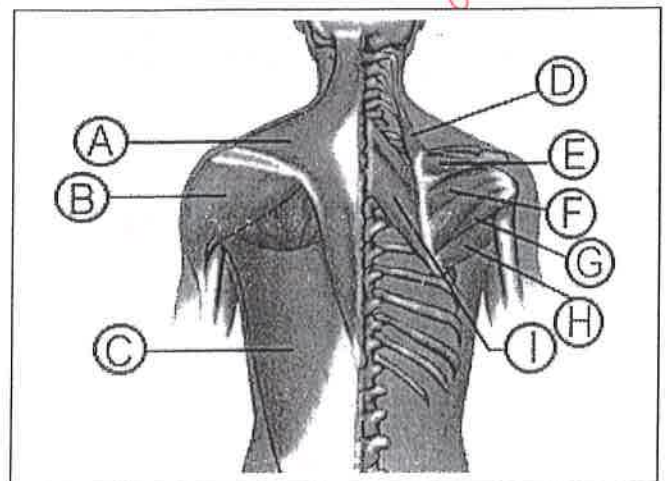
Directions: Identify and label the following muscles

- A. Frontalis
- B. Occipitalis
- C. Masseter
- D. SCM
- E. —
- F. Temporalis
- G. Orbicularis Oculi
- H. Zygomaticus
- I. Orbicularis Oris
- J. Buccinator
- K. Platysma

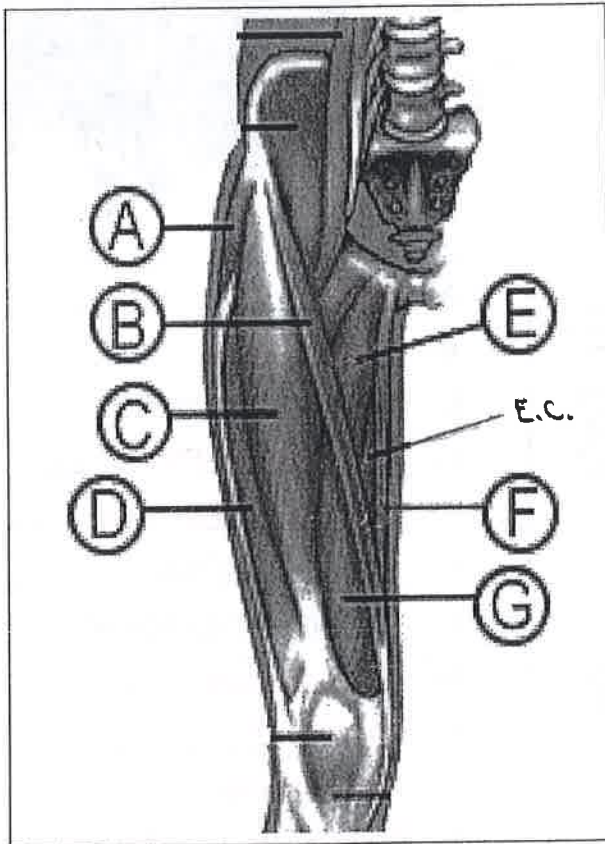
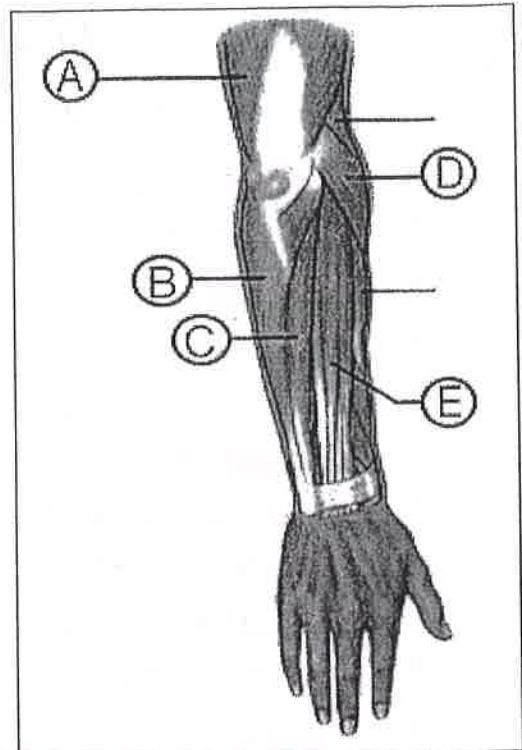


- A. SCM
- B. Pec. Minor
- C. Internal Intercostals
- D. Serratus Anterior
- E. Rectus Abdominis
- F. Internal Oblique
- G. Transverse Oblique
- H. Trapezius
- I. Deltoid
- J. Pec. Major
- K. External oblique

- A. Trapezius
- B. Deltoid
- C. Latissimus dorsi
- D. Levator Scapulae
- E. Supraspinatus
- F. Infraspinatus
- G. Teres minor
- H. Teres major
- I. Rhomboid major

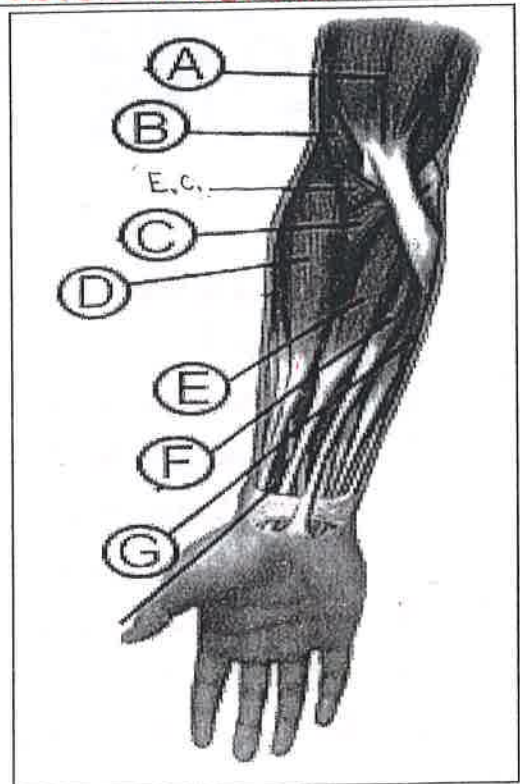


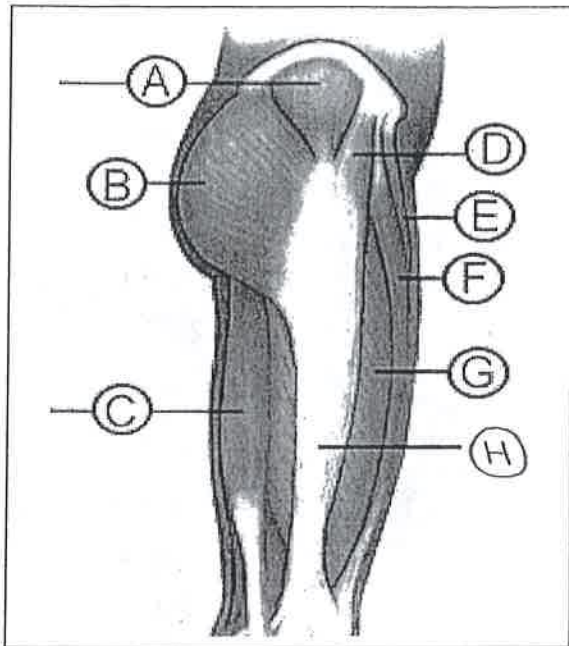
- A. Triceps brachii
- B. Flexor carpi ulnaris
- C. Extensor carpi ulnaris
- D. Brachioradialis
- E. Extensor digitorum



- A. Biceps brachii
- B. Brachialis
- C. Pronator teres
- D. Brachioradialis
- E. Flexor carpi radialis
- F. Palmaris Longus
- G. Flexor carpi ulnaris
- E.C. Supinator

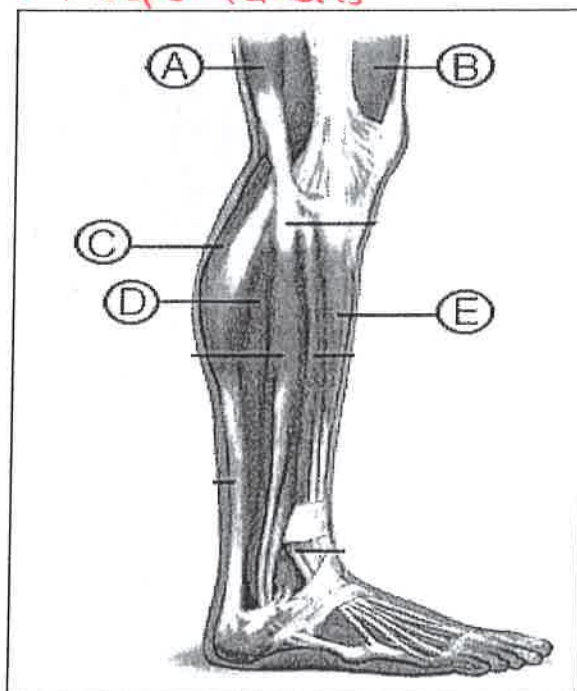
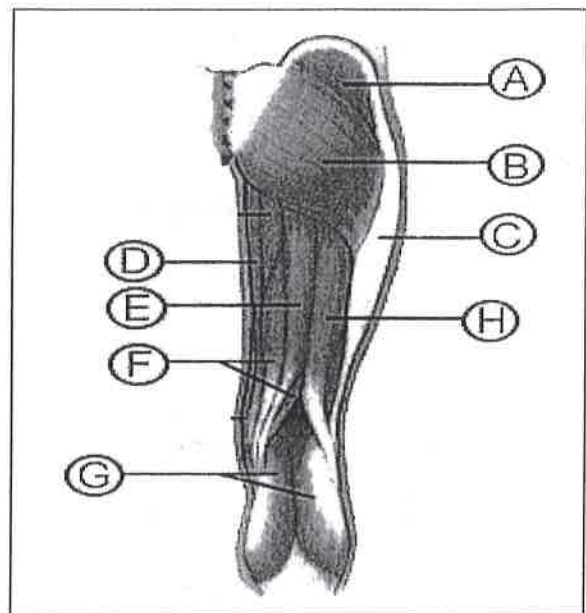
- (E.C. Adductor magnus)
- A. Tensor fascia latae
 - B. Sartorius
 - C. Rectus femoris
 - D. Vastus lateralis
 - E. Adductor longus
 - F. Gracilis
 - G. Vastus medialis





- A. Gluteus medius
- B. Gluteus maximus
- C. Biceps femoris
- D. Tensor fascia latae
- E. Sartorius
- F. Rectus femoris
- G. Vastus lateralis
- H. IT Band

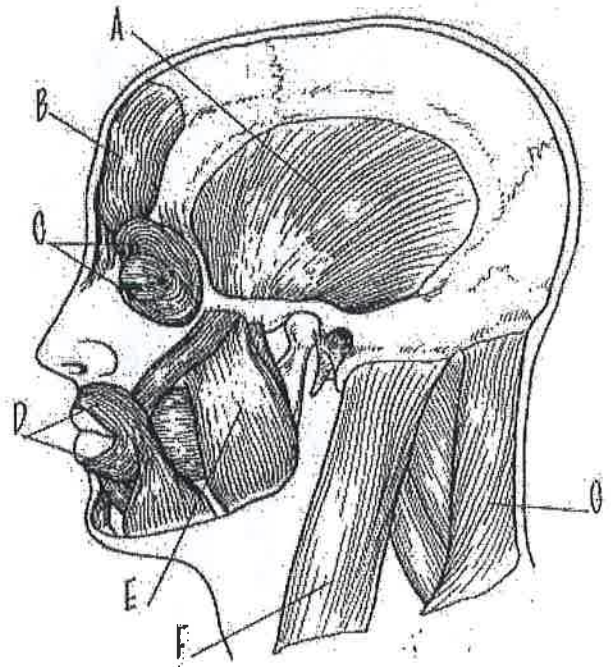
- A. Gluteus medius
- B. Gluteus Maximus
- C. IT Band
- D. Gracilis
- E. Semitendinosus
- F. Semimembranosus
- G. Gastrocnemius
- H. Biceps Femoris



- A. Biceps femoris
- B. Vastus lateralis
- C. Gastrocnemius
- D. Soleus
- E. Tibialis anterior

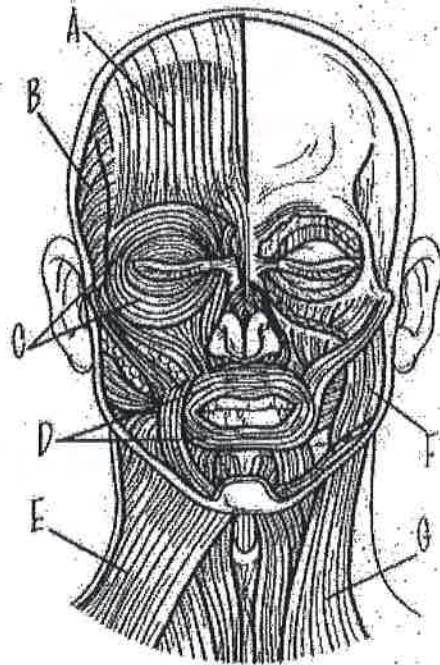
2. Match the muscle with the correct letter from the diagram.

- B Frontalis
- E Masseter
- C Orbicularis oculi
- D Orbicularis oris
- F Sternocleidomastoid
- A Temporalis
- G Trapezius



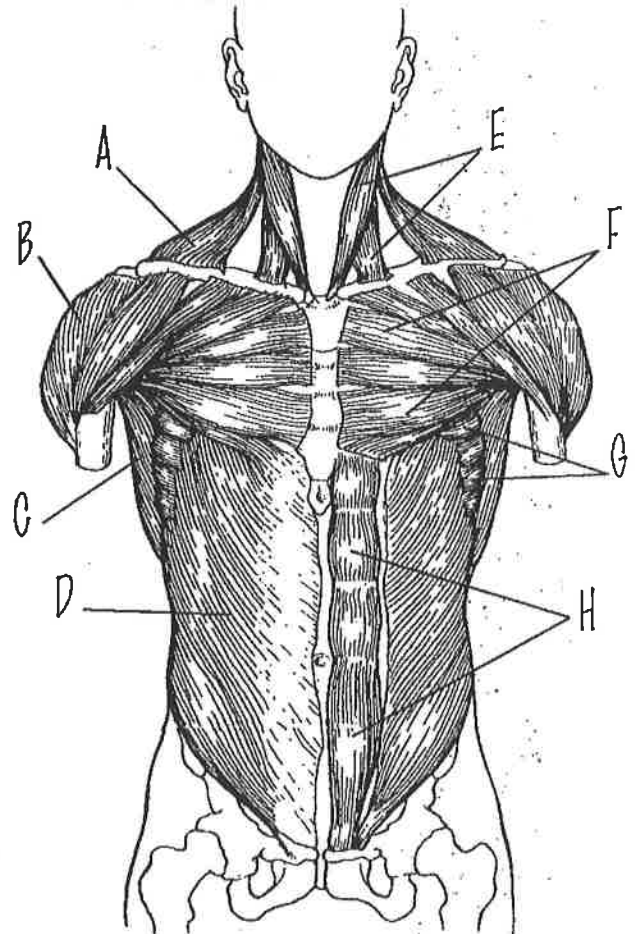
3. Match the muscle with the correct letter from the diagram.

- A Frontalis
- F Masseter
- C Orbicularis oculi
- D Orbicularis oris
- E Platysma
- G Sternocleidomastoid
- B Temporalis



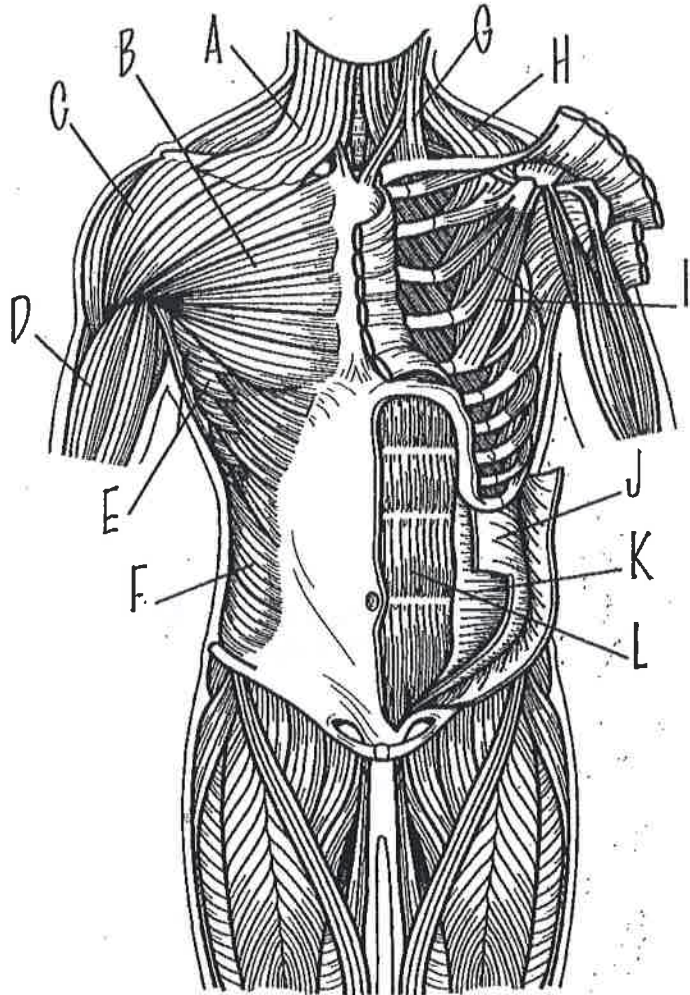
9. Match the muscle with the correct letter from the diagram.

- B Deltoid
- D External oblique
- C Latissimus dorsi
- F Pectoralis major
- H Rectus abdominis
- G Serratus anterior
- E Sternocleidomastoid
- A Trapezius



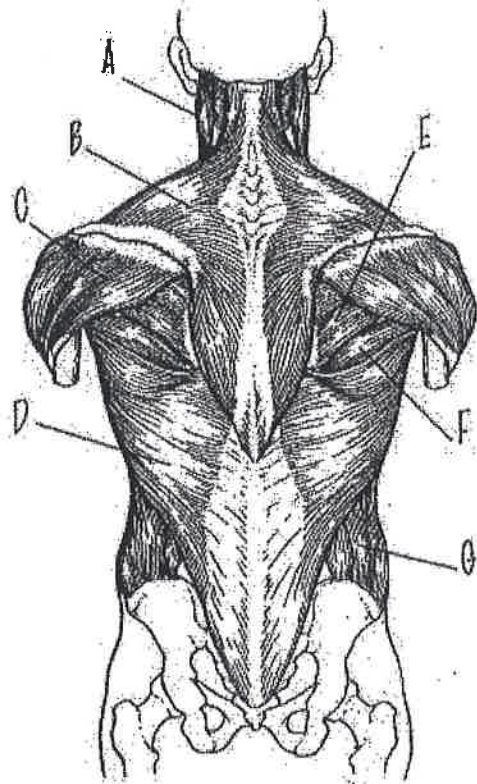
10. Match the muscle with the correct letter from the diagram. NOTE: The muscles on the right (the body's right, not yours) are superficial and the muscles on the left are deep.

- D Biceps brachii
- C Deltoid
- F External oblique
- ~~Internal oblique~~
- B Pectoralis major
- I Pectoralis minor
- A Platysma
- L Rectus abdominis
- E Serratus anterior
- G Sternocleidomastoid
- ~~Transverse abdominis~~
- H Trapezius



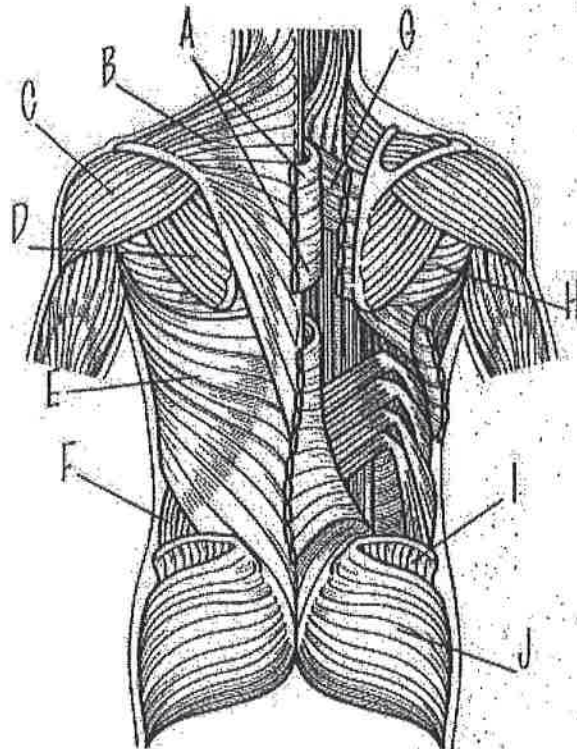
11. Match the muscle with the correct letter from the diagram.

- C Deltoid
- G External Oblique
- E Infraspinatus
- D Latissimus dorsi
- A Sternocleidomastoid
- F Teres major
- B Trapezius



12. Match the muscle with the correct letter from the diagram. NOTE: The muscles on the right (the body's right, not yours) are superficial and the muscles on the left are deep.

- C Deltoid
- F External oblique
- J Gluteus maximus
- I Gluteus medius
- D Infraspinatus
- E Latissimus dorsi
- A Rhomboid major
- G Rhomboid minor
- H Teres major
- B Trapezius



13. Match the muscle with the correct letter from the diagram.

B Biceps brachii

A Deltoid

C Triceps brachii

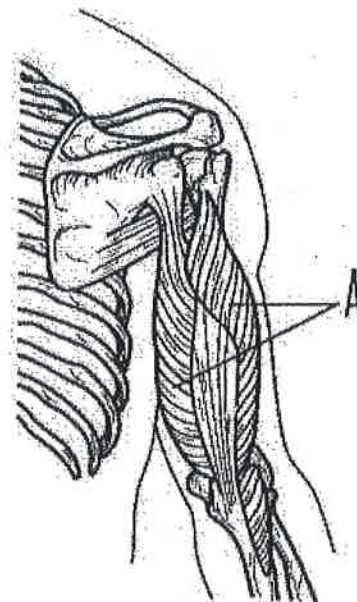
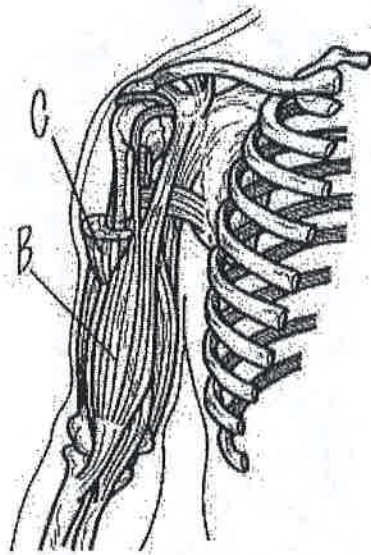


14. Match the muscle with the correct letter from the diagrams below.

B Biceps brachii

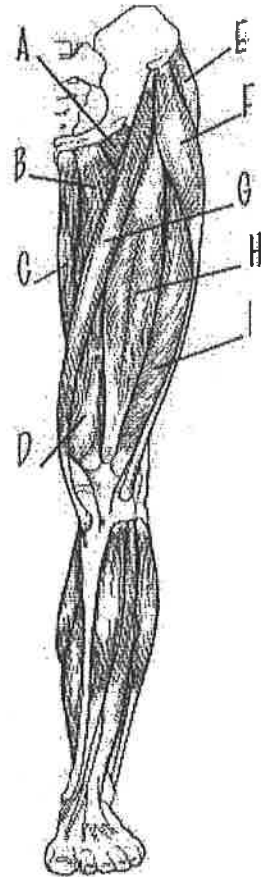
C Deltoid

A Triceps brachii



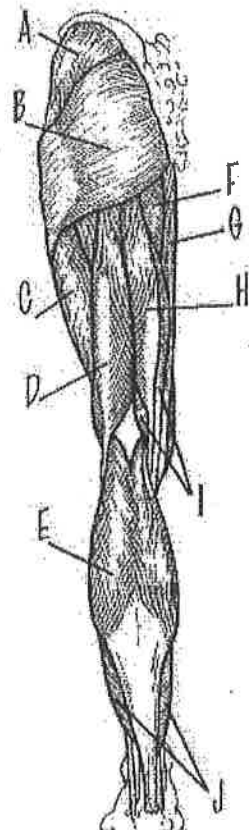
16. Match the muscle with the correct letter from the diagram.

- B Adductor longus
- E Gluteus medius
- C Gracilis
- A Pectineus
- H Rectus femoris
- G Sartorius
- F Tensor fasciae latae
- I Vastus lateralis
- D Vastus medialis



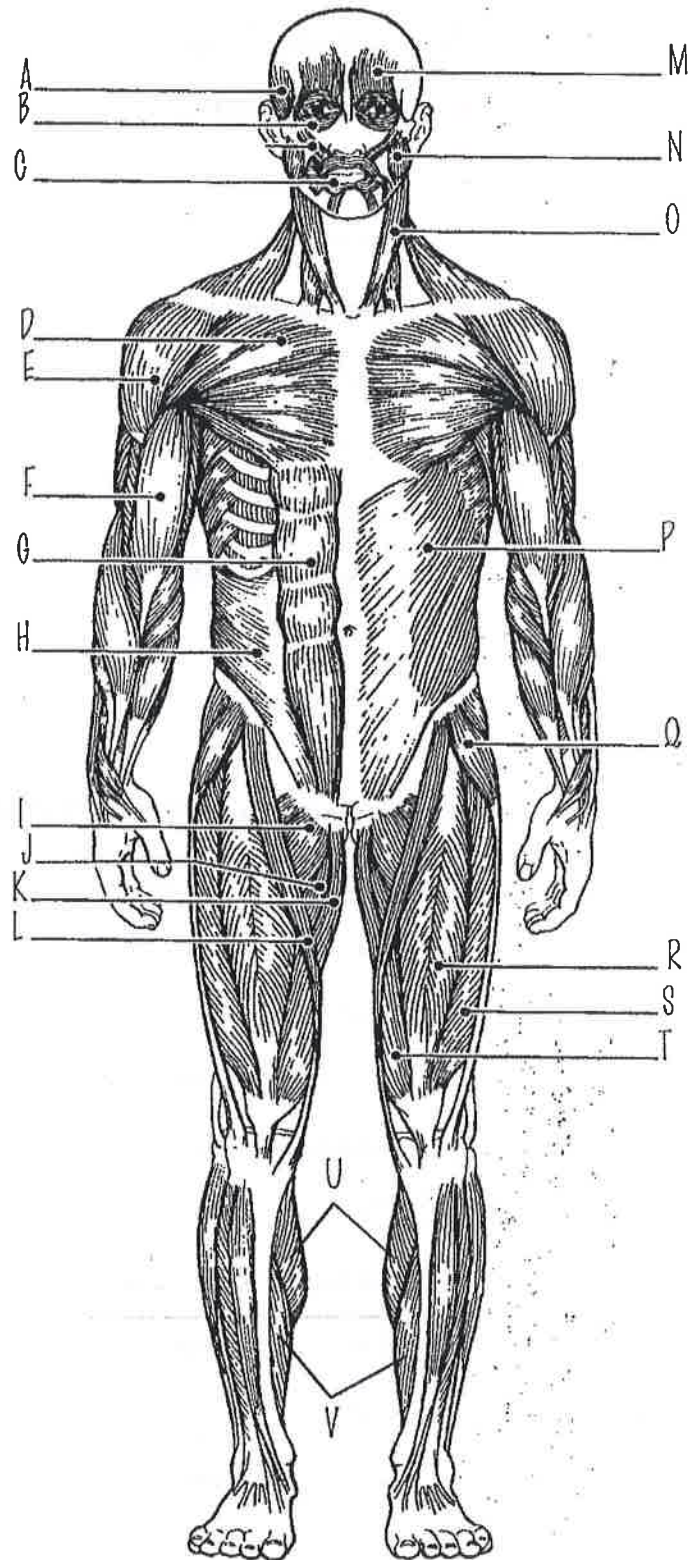
17. Match the muscle with the correct letter from the diagram.

- F Adductor magnus
- D Biceps femoris
- E Gastrocnemius
- B Gluteus maximus
- A Gluteus medius
- G Gracilis
- I Semimembranosus
- H Semitendinosus
- J Soleus
- C Vastus lateralis



20. Match the muscle with the correct letter from the diagram.

- J Adductor longus
- F Biceps brachii
- E Deltoid
- P External oblique
- M Frontalis
- U Gastrocnemius
- K Gracilis
- H Internal oblique
- N Masseter
- B Orbicularis oculi
- C Orbicularis oris
- I Pectineus
- D Pectoralis major
- G Rectus abdominis
- R Rectus femoris
- L Sartorius
- V Soleus
- O Sternocleidomastoid
- A Temporalis
- Q Tensor fasciae latae
- S Vastus lateralis
- T Vastus medialis



21. Match the muscle with the correct letter from the diagram.

- D Adductor magnus
- E Biceps femoris
- J Deltoid
- M External oblique
- G Gastrocnemius
- C Gluteus maximus
- N Gluteus medius
- A Infraspinatus
- L Latissimus dorsi
- F Semitendinosus
- H Soleus
- B Teres major
- I Trapezius
- K Triceps brachii
- O Vastus lateralis

