

Name: _____ Class: _____

Identify one area in the body where the following joints can be found.

(6 marks)

- Ball and socket _____
- Hinge _____
- Pivot _____
- Condylloid _____
- Cartilaginous _____
- Fixed _____

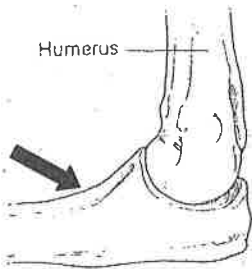
Complete the following sentences

(4 marks)

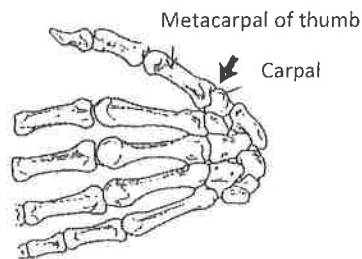
- _____ link bones together and limits the range of movement of a joint.
- _____ protects bones and prevents them from wearing each other down.

Under each picture write the names of the **synovial** joints shown.

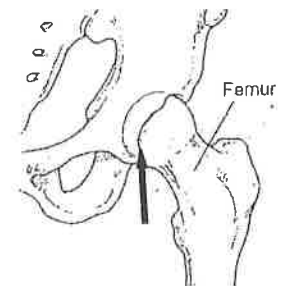
(8 marks)



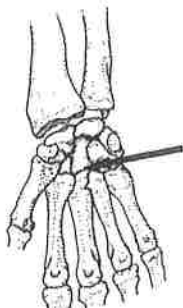
a. _____



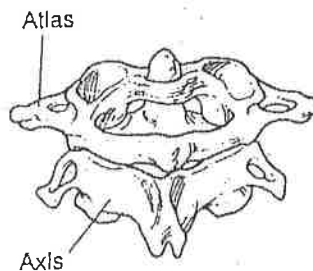
b. _____



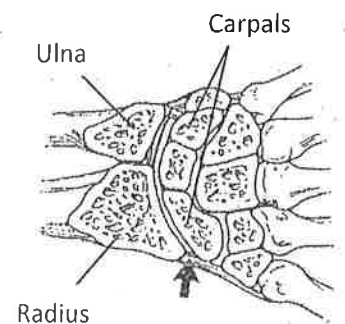
c. _____



d. _____



e. _____



f. _____